

Reading

Can you put sound buttons and lines on these words? Read them to an adult after you have done this

might

frame

chat

chime

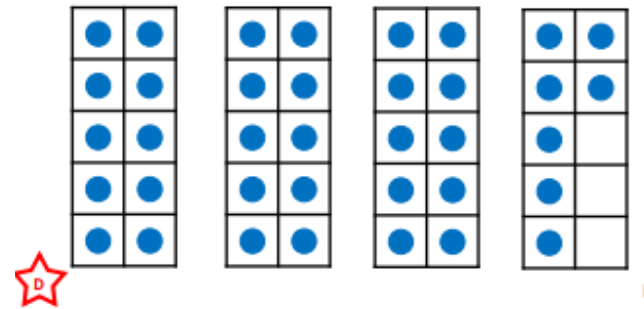
meeting

proud

Mental maths and fluency

1b. Circle the numbers that can be represented using the equipment below.

30	41	35
----	----	----



Maths

Josh and Cara are looking at ordered number cards.




Josh

19		16		8
----	--	----	--	---

The missing numbers could be seventeen and five.

The missing numbers could be eighteen and ten.



Cara

Who is correct? Explain how you know.

Pick a challenge to complete this week.

History

Find out 3 facts about Samuel Pepys



DT

Can you help a grown up at home to make a healthy meal? You can draw a picture of what you have made.



Science

Can you research what different animals eat. Find out what an omnivore, herbivore and carnivore are.




PSHE

Create a poster informing people about different ways to stay fit and healthy.



RE

We have been learning the Easter story. Can you create an Easter Story book?



PE

Practice your catching and throwing skills, ask a grown up to practice with you.



Year 1's
Home Learning

Homework due back on
02.04.25